

9) Problema A


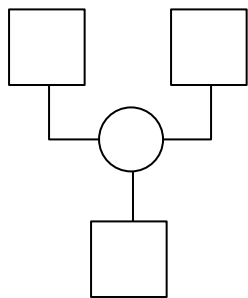
Tommaso ha 147 figurine.
Ne regala 65 a Filippo.

Quante figurine restano a Tommaso?


Dati: _____

Operazione in riga: _____

Diagramma a blocchi



Calcolo in colonna



Rispondo: _____

10) Problema B


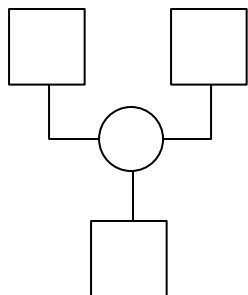
Federica ha una collezione di 179 matite profumate.
Dopo Aurora gliene regala altre 42.

Quante matite ha in tutto ora Federica nella sua collezione?


Dati: _____

Operazione in riga: _____

Diagramma a blocchi



Calcolo in colonna



Rispondo: _____
