

VERIFICA SULLE FRAZIONI

A. Collega ogni elemento alla sua spiegazione.

Numeratore

Significa dividere in parti uguali

Denominatore

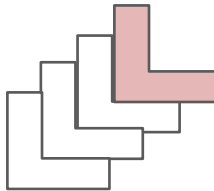
Indica quante parti uguali dell'intero ho considerato

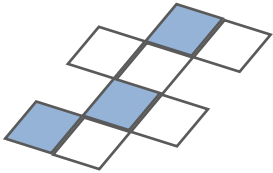
Linea di frazione

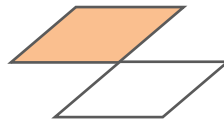
Indica in quante parti uguali ho diviso l'intero

B. Osserva la figura e scrivi la frazione in numeri e in parole.










C. Leggi la frazione, rappresentala nella figura, scrivila in parole.



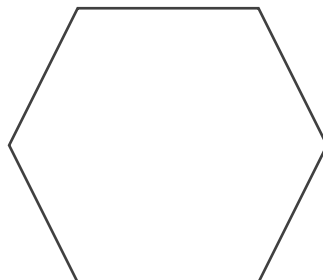
$\frac{5}{8}$



$\frac{3}{7}$



$\frac{4}{5}$



$\frac{7}{12}$
