



ESERCIZI SULLE FRAZIONI

A. Colora solo le figure divise in parti uguali.




B. Dividi le figure in **2 parti uguali**, come nell'esempio.



C. Dividi ogni intero secondo la frazione indicata accanto, colora l'unità frazionaria, scrivi sui puntini come si chiamano i termini della frazione.



$\frac{1}{3}$ *numeratore*
denominatore




$\frac{1}{4}$
.....



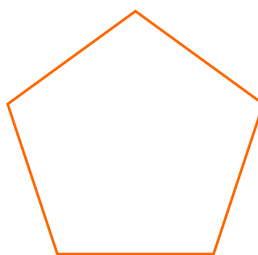
$\frac{1}{6}$
.....



$\frac{1}{8}$
.....



$\frac{1}{8}$
.....



$\frac{1}{5}$
.....

D. Metti in relazione le figure con la frazione.



$\frac{1}{2}$

$\frac{4}{5}$

$\frac{2}{4}$

$\frac{3}{6}$

$\frac{5}{8}$

$\frac{2}{3}$

E. Scrivi a parole come si leggono le frazioni.

$\frac{4}{5}$ *quattro quinti* $\frac{5}{6}$ $\frac{2}{4}$