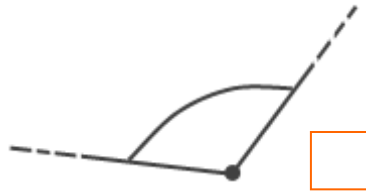


GLI ANGOLI 3

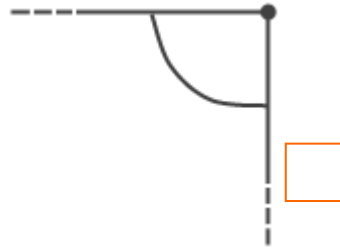
A. Classifica gli angoli distinguendo con le lettere iniziali gli angoli **retti** R, **piatti** P, **giro** G, **acuti** A e **ottusi** O; usa il tuo angolo campione come modello, ma poi esercitati a misurarli con il goniometro.



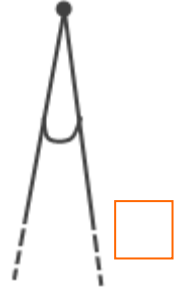
misura _____



misura _____



misura _____



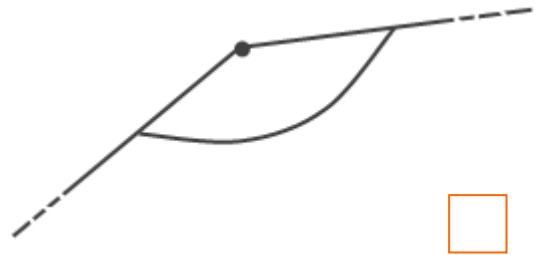
misura _____



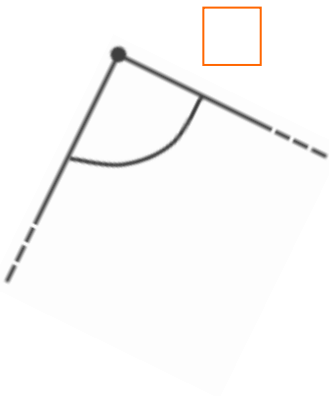
misura _____



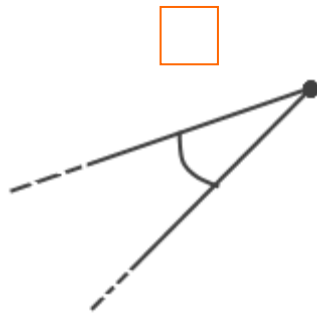
misura _____



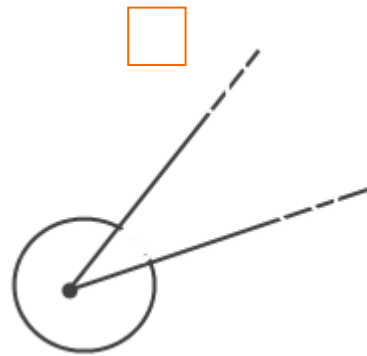
misura _____



misura _____



misura _____



misura _____



misura _____