


# UN RIPASSO CI VUOLE SEMPRE



A. Leggi il testo, trova la situazione problematica e scrivi la domanda.

Per il progetto "Frutta e verdura nelle scuole" alla scuola primaria di Fiuggi hanno consegnato 9 scatoloni contenenti ciascuno 12 buste di carotine fresche.

Domanda → \_\_\_\_\_


**Risolvo**

Dati: \_\_\_\_\_

Operazione in riga: \_\_\_\_\_

Rispondo → \_\_\_\_\_

Calcolo in colonna




B. Calcola rapidamente.

$$3 \text{ da} - 5 \text{ u} = \underline{\quad} \text{ u}$$

$$2 \text{ h} + 16 \text{ u} = \underline{\quad} \text{ u}$$

$$13 \text{ da} - 30 \text{ u} = \underline{\quad} \text{ u}$$

$$26 \text{ da} - 6 \text{ da} = \underline{\quad} \text{ u}$$




$$458 \text{ u} - 5 \text{ da} = \underline{\quad} \text{ u}$$

$$453 \text{ u} + 2 \text{ da} = \underline{\quad} \text{ u}$$

$$541 \text{ u} - 1 \text{ h} = \underline{\quad} \text{ u}$$

$$321 \text{ u} + 2 \text{ h} = \underline{\quad} \text{ u}$$



C. Applica la proprietà associativa e calcola in riga.

$$123 + 7 + 11 = \underline{\quad} + \underline{\quad} = \underline{\quad}$$

$$25 + 142 + 8 = \underline{\quad} + \underline{\quad} = \underline{\quad}$$

$$69 + 342 + 31 = \underline{\quad} + \underline{\quad} = \underline{\quad}$$

$$226 + 47 + 53 = \underline{\quad} + \underline{\quad} = \underline{\quad}$$


D. Applica la proprietà invariantiva in modo conveniente (il minuendo deve finire con 0) e calcola in riga.

$$457 - 114 =$$

$$\begin{array}{r} \downarrow \quad \downarrow \quad \quad \\ \underline{\quad} - \underline{\quad} = \underline{\quad} \end{array}$$

$$543 - 85 =$$

$$\begin{array}{r} \downarrow \quad \downarrow \quad \quad \\ \underline{\quad} - \underline{\quad} = \underline{\quad} \end{array}$$



$$535 - 87 =$$

$$\begin{array}{r} \downarrow \quad \downarrow \quad \quad \\ \underline{\quad} - \underline{\quad} = \underline{\quad} \end{array}$$

$$468 - 137 =$$

$$\begin{array}{r} \downarrow \quad \downarrow \quad \quad \\ \underline{\quad} - \underline{\quad} = \underline{\quad} \end{array}$$

E. Calcola in colonna con la prova accanto.

$$404 - 76 = \underline{\quad}$$

$$523 - 178 = \underline{\quad}$$

$$502 - 315 = \underline{\quad}$$

F. Calcola in colonna senza prova.

$$104 \times 5 = \underline{\quad}$$

$$43 \times 7 = \underline{\quad}$$

$$62 \times 9 = \underline{\quad}$$