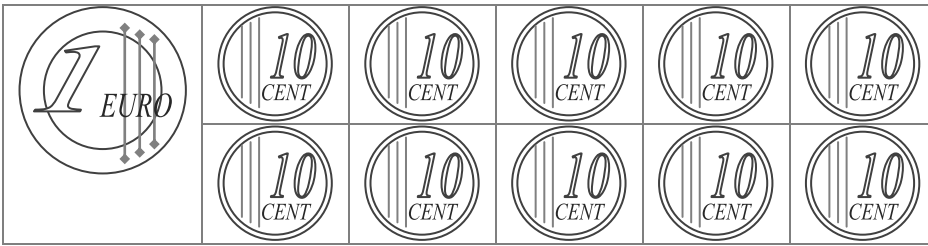
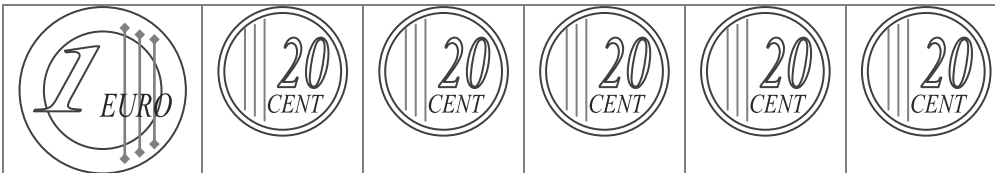



€1 = 10 monete da 10 centesimi (eurocent) €1 = €0,10 x ____



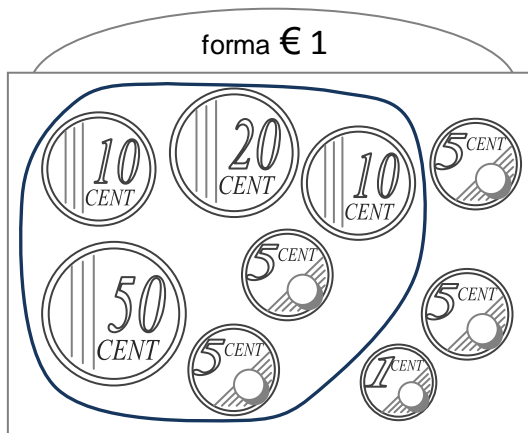
€1 = 5 monete da 20 centesimi (eurocent) €1 = €0,20 x ____



€1 = 2 monete da 50 centesimi (eurocent) €1 = €0,50 x ____



A. Forma gruppi da 1€ e scrivi l'addizione. Segui l'esempio.



0,50+0,20+0,10+0,10+0,5+0,5=1

