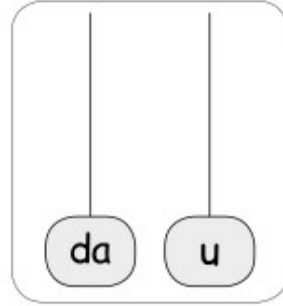

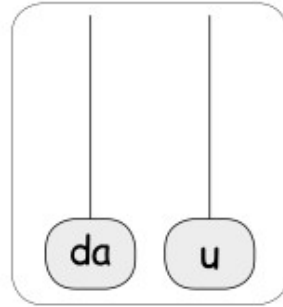


I NUMERI DA 20 A 40

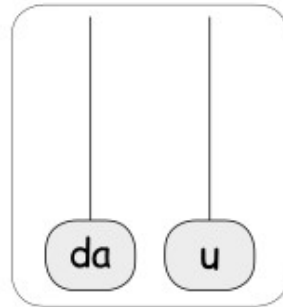

 **Raggruppa per 10** e registra sull'abaco e in tabella.



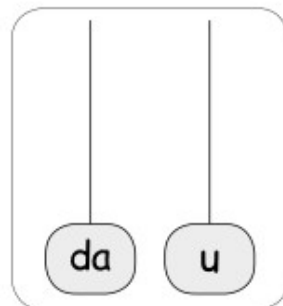

da	u
.....



da	u
.....



da	u
.....



da	u
.....

 **Scomponi** i numeri come nell'esempio.

$21 = 2 \text{ da e } 1 \text{ u}$

$38 = \underline{\quad} \text{ da e } \underline{\quad} \text{ u}$

$26 = \underline{\quad} \text{ da e } \underline{\quad} \text{ u}$

$34 = \underline{\quad} \text{ da e } \underline{\quad} \text{ u}$

$25 = \underline{\quad} \text{ da e } \underline{\quad} \text{ u}$

$32 = \underline{\quad} \text{ da e } \underline{\quad} \text{ u}$

 **Componi** i numeri come nell'esempio.

$4 \text{ u e } 2 \text{ da} = 24$

$12 \text{ u e } 2 \text{ da} = \underline{\quad}$

$15 \text{ u e } 1 \text{ da} = \underline{\quad}$

$3 \text{ da e } 5 \text{ u} = \underline{\quad}$

$2 \text{ da e } 11 \text{ u} = \underline{\quad}$

$1 \text{ da e } 24 \text{ u} = \underline{\quad}$

$6 \text{ u e } 2 \text{ da} = \underline{\quad}$

$3 \text{ da e } 8 \text{ u} = \underline{\quad}$

$2 \text{ da e } 17 \text{ u} = \underline{\quad}$