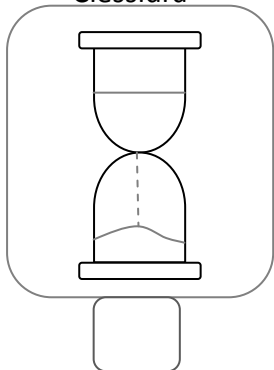



ALUNNO _____

1. Numera da 1 a 3 i diversi strumenti di misurazione del tempo, dal più antico al più moderno.


Clessidra



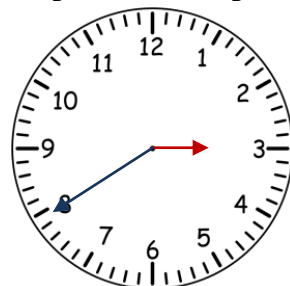
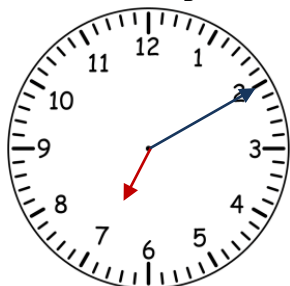
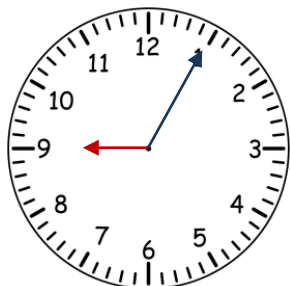
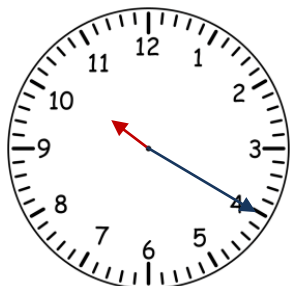
Meridiana



Orologio



2. Scrivi le ore e i minuti indicati dagli orologi analogici.



antimeridiane

antimeridiane

antimeridiane

antimeridiane



pomeridiane

pomeridiane

pomeridiane

pomeridiane

3. Osserva le immagini e scrivi i nomi delle stagioni; numera le stagioni in esatta successione ciclica, partendo dalla primavera; colora opportunamente.



Primavera
