

☺ Esercizi con i numeri entro il 100

1. Riscrivi i numeri dal più grande al più piccolo.

65, 57, 12, 31, 70, 28, 84, 96, 43, 20, 2, 7, 82, 63, 41,
25, 16, ~~98~~, 74, 50, 33.

98, _____

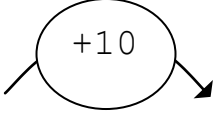
2. Completa la tavola di addizione.

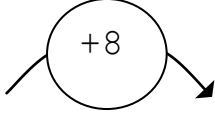
+	1	2	3	4	5	6	7	8	9
10	11								
20									
30									
40									
50									
60									
70									
80									
90									

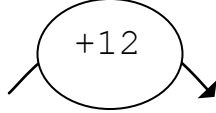
3. Completa la tavola di sottrazione.

-	10	20	30	40	50	60	70	80	90
1	9								
2									
3									
4									
5									
6									
7									
8									
9									

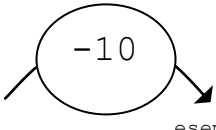
4. Esegui le **addizioni** nelle macchine operatrici calcolando a mente.

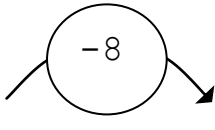
ENTRATA OPERATORE USCITA	
 esempio	
67	77
82	
48	
36	
12	
1	
34	
41	
53	
64	
88	
90	
3	

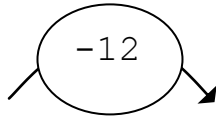
ENTRATA OPERATORE USCITA	
	
58	
81	
75	
41	
50	
28	
4	
30	
46	
52	
1	
80	
66	

ENTRATA OPERATORE USCITA	
	
72	
80	
63	
4	
8	
33	
15	
34	
81	
5	
25	
38	
60	

5. Esegui le **sottrazioni** nelle macchine operatrici calcolando a mente.

ENTRATA	OPERATORE	USCITA
 esempio		
53		43
79		
31		
45		
18		
12		
26		
74		
32		
85		
61		
98		
17		

ENTRATA	OPERATORE	USCITA
		
53		
79		
31		
45		
18		
12		
26		
74		
32		
85		
61		
98		
17		

ENTRATA	OPERATORE	USCITA
		
53		
79		
31		
45		
18		
12		
26		
74		
32		
85		
61		
98		
17		

6. Applica in riga la proprietà commutativa e calcola tutte le operazioni in colonna sul quaderno.

$$68 + 29 = \underline{\quad}$$

$$24 + 56 = \underline{\quad}$$

$$9 + 85 = \underline{\quad}$$

$$31 + 67 = \underline{\quad}$$

$$29 + 68 = \underline{\quad}$$

$$36 + 14 + 25 = \underline{\quad}$$

$$18 + 15 + 43 = \underline{\quad}$$

$$31 + 25 + 16 = \underline{\quad}$$

$$42 + 28 + 17 = \underline{\quad}$$

$$25 + 36 + 14 = \underline{\quad}$$

7. Calcola in colonna sul quaderno.

$$63 - 28 = \underline{\quad}$$

$$74 - 39 = \underline{\quad}$$

$$36 - 15 = \underline{\quad}$$

$$81 - 19 = \underline{\quad}$$

$$90 - 35 = \underline{\quad}$$

$$87 - 64 = \underline{\quad}$$

$$74 - 34 = \underline{\quad}$$

$$52 - 37 = \underline{\quad}$$

$$80 - 16 = \underline{\quad}$$

$$87 - 48 = \underline{\quad}$$

$$84 - 35 = \underline{\quad}$$

$$39 - 28 = \underline{\quad}$$

$$90 - 75 = \underline{\quad}$$

$$70 - 39 = \underline{\quad}$$

$$61 - 40 = \underline{\quad}$$

$$96 - 48 = \underline{\quad}$$