

ADDIZIONI NELLA FABBRICA DI GIOCATTOLI

☺ OSSERVA I DISEGNI E RACCONTA QUELLO CHE VEDI.




$$2 + 2 = 4$$


✍ TRASFORMA IL RACCONTO IN LINGUAGGIO MATEMATICO USANDO I NUMERI E LA MACCHINA OPERATRICE + CHE SIGNIFICA "SI AGGIUNGE" E IL SEGNO = CHE SIGNIFICA "SI OTTIENE".




--	--	--	--	--




--	--	--	--	--



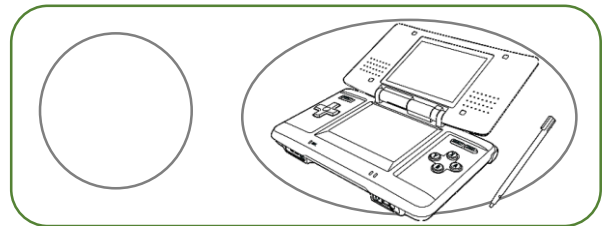
--	--	--	--	--




--	--	--	--	--




--	--	--	--	--



--	--	--	--	--



--	--	--	--	--



--	--	--	--	--